


Emily sees 6 kittens.




Chris sees 3 kittens.




How many altogether?

Emily sees 4 piglets.



Chris sees 4 piglets.



How many altogether?


+

---


+

---

Emily sees 2 ducklings.



Chris sees 8 ducklings.



How many altogether?

Emily sees 5 puppies.



Chris sees 1 puppy.



How many altogether?


+

---

+

---

Emily feeds 11 kittens.



Chris feeds 5 kittens.




How many altogether?


+



Emily feeds 7 puppies.



Chris feeds 8 puppies.




How many altogether?


+



Emily feeds 6 kittens.



Chris feeds 6 kittens.




How many altogether?


+

---

Emily feeds 9 piglets.



Chris feeds 7 piglets.



How many altogether?

+

---