




Paige feeds cats. How many cats does Paige feed?

Paige





Drew counts scarves. How many scarves does Drew count?

Drew



Paige fills dishes. How many dishes does Paige fill?

Paige




15

11

17

Drew walks dogs. How many dogs does Drew walk?

Drew



12

13

18




For hands-on instruction, print, cut out and laminate.

Number Sense 6
How Many? 1 - 5

Name: _____



How many?



How many?



How many?



How many?

