


Paige counts 3 blankets.

Drew counts 1 blanket.

 How many altogether?



+




=



Paige has 6 scarves.

Drew has 2 scarves.

 How many altogether?



+




=



Paige fills 3 dishes.

Drew fills 2 dishes.

 How many altogether?



+




=



Paige sees 5 dogs.

Drew sees 4 dogs.

 How many altogether?



+



=

