

### 3.4 Equations of Lines

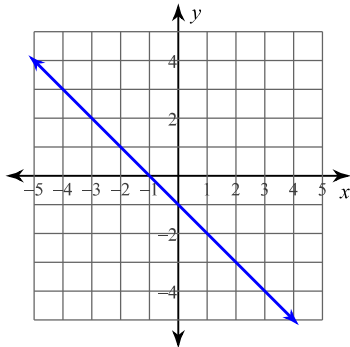
© 2017 Kuta Software LLC. All rights reserved.

Name \_\_\_\_\_ ID: 1

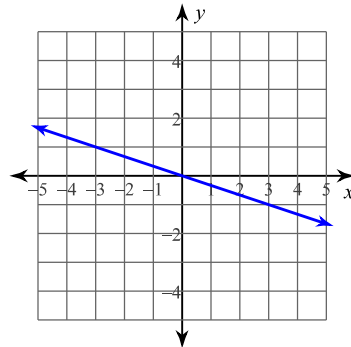
Write an equation of a line in Slope intercept form Date \_\_\_\_\_ Period \_\_\_\_\_

Write the slope-intercept form of the equation of each line.

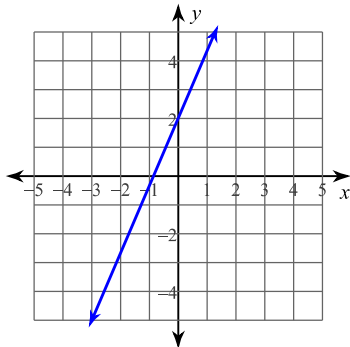
1)



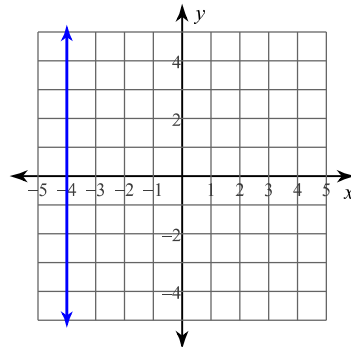
2)



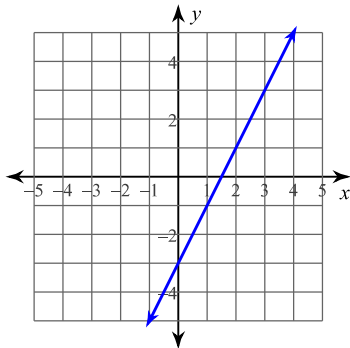
3)



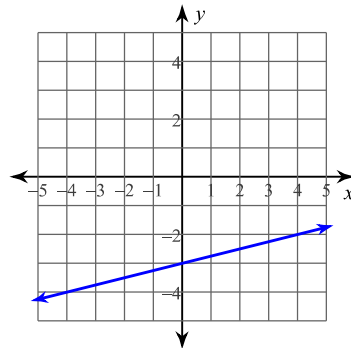
4)



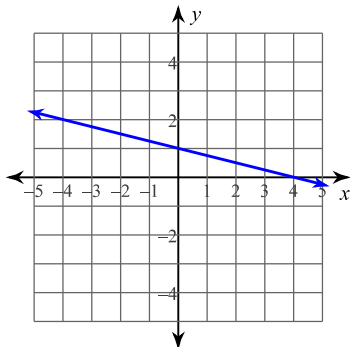
5)



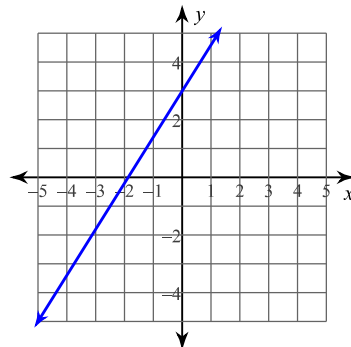
6)



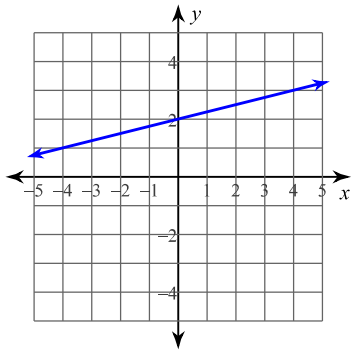
7)



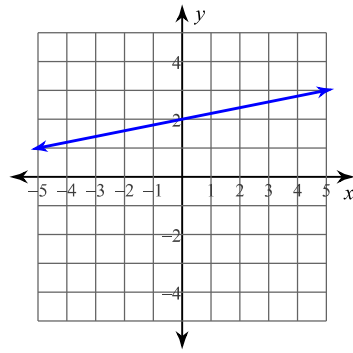
8)



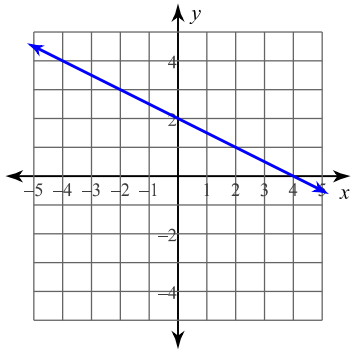
9)



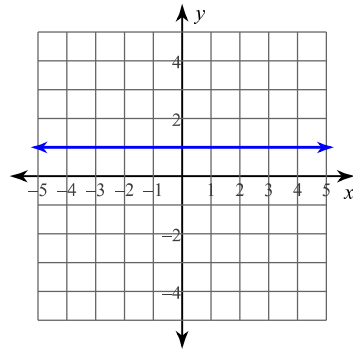
10)



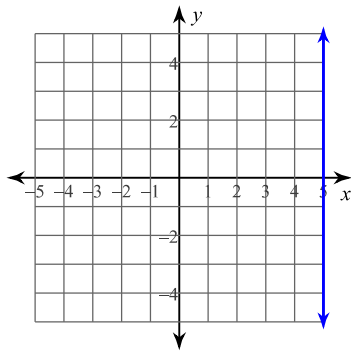
11)



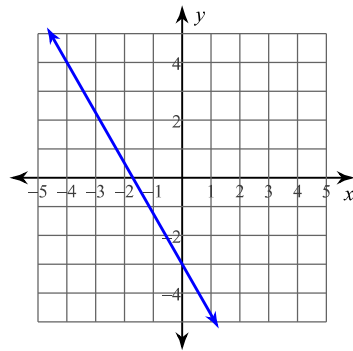
12)



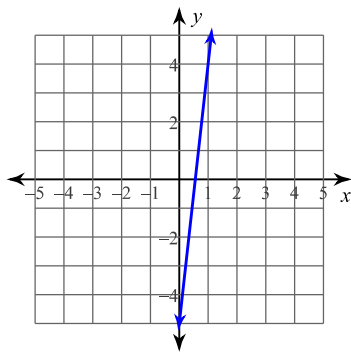
13)



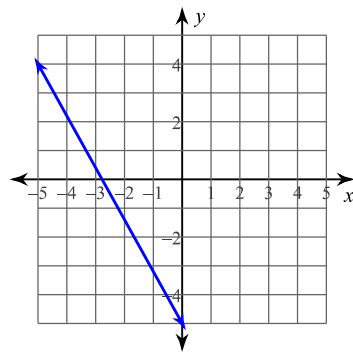
14)



15)



16)



# CRYPTIC QUIZ

1. Why does Beethoven now spend all his time erasing music?

$\overline{16}$   $\overline{6}$   $\overline{-4}$   $\overline{10}$   $\overline{-3}$   $\overline{6}$   $\overline{-9}$   $\overline{7}$   $\overline{20}$   $\overline{-5}$   $\overline{7}$   $\overline{10}$   $\overline{-4}$   $\overline{3}$   $\overline{21}$

2. What is it called when a sea bird lands on a channel marker?

$\overline{-36}$   $\overline{9}$   $\overline{7}$   $\overline{-8}$   $\overline{20}$   $\overline{6}$   $\overline{6}$   $\overline{-2}$   $\overline{10}$   $\overline{21}$   $\overline{9}$   $\overline{11}$   $\overline{11}$

3. How does a tree feel after a hard day at work?

$\overline{-36}$   $\overline{9}$   $\overline{10}$   $\overline{16}$   $\overline{6}$   $\overline{-3}$

TO DECODE THE ANSWERS TO THESE QUESTIONS:

Solve each equation below and find your answer in the code. Each time the solution appears, write the letter of that exercise above it.

Ⓐ  $8u = 3u + 35$

Ⓝ  $7y = 33 - 4y$

Ⓔ  $2x + 48 = 10x$

Ⓣ  $5t - 26 = 18t$

Ⓜ  $k = 8k + 28$

Ⓖ  $-30n = -27n - 63$

ⓗ  $4x + 4 = 2x + 36$

Ⓓ  $9y - 1 = y - 25$

Ⓟ  $14p - 8 = 22 + 20p$

Ⓛ  $z + 81 = 9z - 7$

Ⓨ  $39 - 12w = 7 - 16w$

Ⓒ  $-15v - 40 = 23 - 8v$

Ⓜ  $63 - x = 2x + 3$

Ⓤ  $3n + 46 = 1 + 8n$

Ⓑ  $12r - 18 = 13r + 18$

Ⓢ  $-x - 1 = x - 21$