

Which Is Greater?

Name: _____


1. Count the items in each row. Place the number in the box.
2. Place a checkmark in the small box next to the number that is greater.



Number	Which is greater?
<input type="text"/>	<input type="checkbox"/>



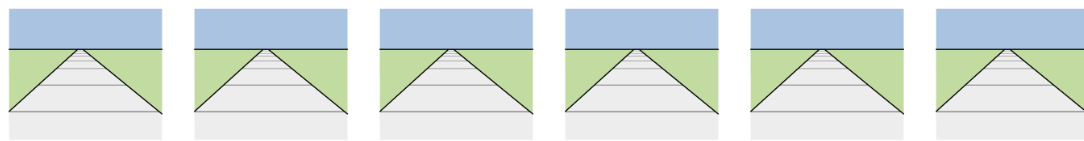
<input type="text"/>	<input type="checkbox"/>
----------------------	--------------------------



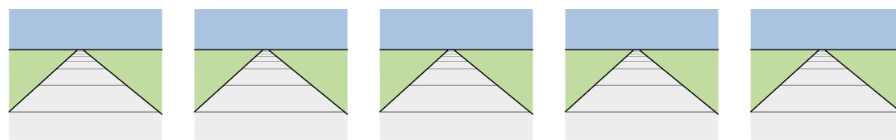
<input type="text"/>	<input type="checkbox"/>
----------------------	--------------------------



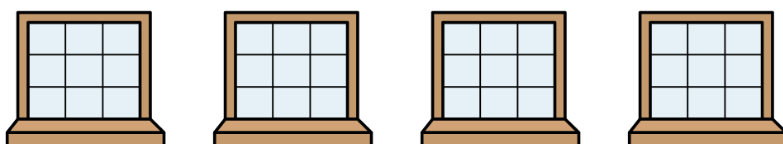
<input type="text"/>	<input type="checkbox"/>
----------------------	--------------------------




<input type="text"/>	<input type="checkbox"/>
----------------------	--------------------------



<input type="text"/>	<input type="checkbox"/>
----------------------	--------------------------



<input type="text"/>	<input type="checkbox"/>
----------------------	--------------------------



<input type="text"/>	<input type="checkbox"/>
----------------------	--------------------------