


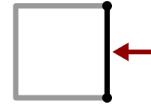


Chris shops for items for his garden.

1. Pick a shape and put it over the lattice panel.



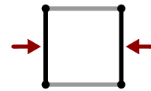
2. How many total sides?



3. How many equal sides?



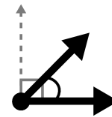
4. How many sets of parallel sides?



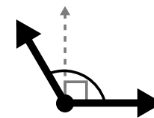
5. How many angles?



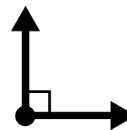
6. How many acute angles?



7. How many obtuse angles?



8. How many right angles?



9. What is the shape?

