

Chapter 9 Test: Money, Measurement, Time

Name : _____

Score : _____

Teacher : _____

Date : _____

1)



\$ _____

2)



\$ _____

3)



\$ _____

4)



\$ _____

5)



\$ _____

6)



\$ _____

7)



\$ _____

8)




\$ _____

Right on the Money

Counting with quarters

Name _____

How much is it?
Circle the right amount.
X the wrong amounts.



A.




28¢

32¢

40¢

B.



26¢

30¢

35¢

C.




30¢

40¢

50¢

D.



27¢

36¢

45¢

E.



50¢

65¢

75¢

F.



28¢

40¢


55¢

How Many Inches?

This is an inch unit.

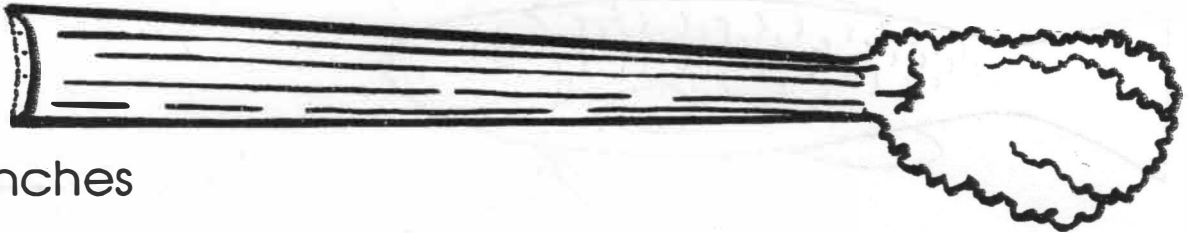


This inchworm is 3 inches long.



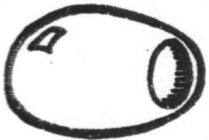
Cut out the inch ruler below. Use your ruler to find the lengths.

1.




_____ inches

2.



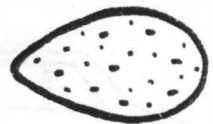
_____ inch

3.




_____ inches

4.



_____ inch

5.




_____ inches

6.

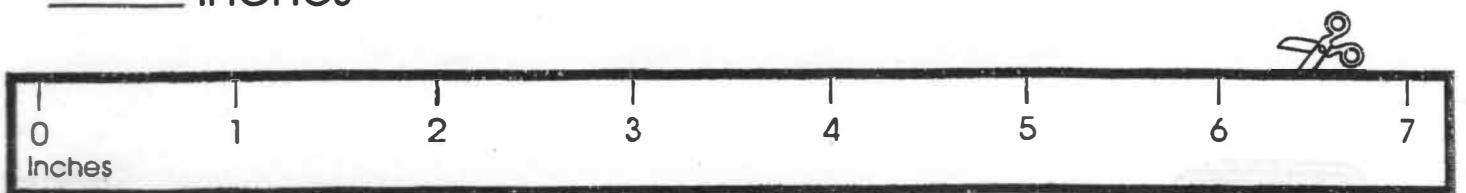


_____ inches

7.



_____ inches



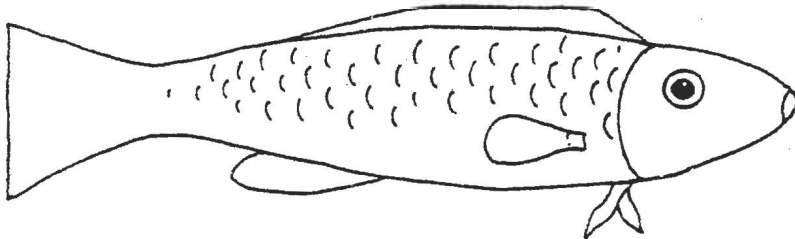
NAME _____



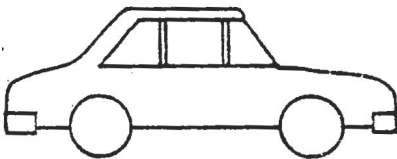
3 inches

How long?

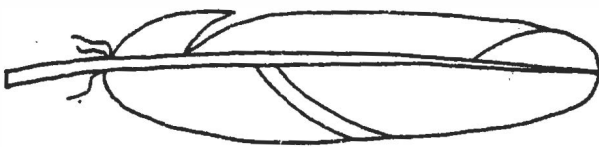
Measure each object with your inch ruler.



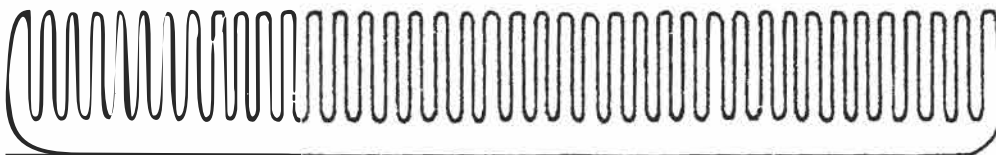
_____ inches




_____ inches



_____ inches



_____ inches




_____ inches

Reading the Clock

Use your clock. Show the time.
Write the time two ways.


1.



_____ o'clock

1:00


2.



_____ o'clock

:


3.



_____ o'clock

:


4.



_____ o'clock

:


5.



_____ o'clock

:

6.




_____ o'clock


:

► Problem Solving

7. It is 7 o'clock. Jenny has to go to bed in one hour.



What time does Jenny go to bed? Write the time two ways.




_____ o'clock

:


Half Hour

Write the time.




5:30


2.




3.




4.




5.




6.




7.



8.



9.



► Problem Solving

10. The movie starts at 7:30.
It lasts for two hours.
What time is the movie over?
Circle the clock that shows
when the movie is over.

