

Teacher Name: _____

Period _____

You must show all work to receive credit.**Solve each equation.**

1) $13 - 7n = -(-7 + 6n)$

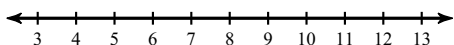
2) $-5(7 - 2x) + 3 = -32 + 3x$

3) $\frac{9}{2} = \frac{17}{5}m + 2m$

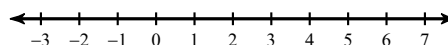
4) $b + \frac{7}{6} - 2 = \frac{7}{6}$

Solve each inequality and graph its solution.

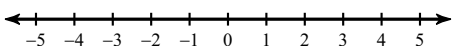
5) $21 + 2m \geq -(-4m - 7)$



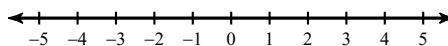
6) $-(8x - 4) > -2x + 10$



7) $-8 \geq -2(-7 - a) + 2(1 - 7a)$



8) $-5(7 + 7x) - 5(-7x + 1) \geq -4$

**Solve each proportion.**

9) $\frac{a - 9}{9} = \frac{a + 9}{7}$

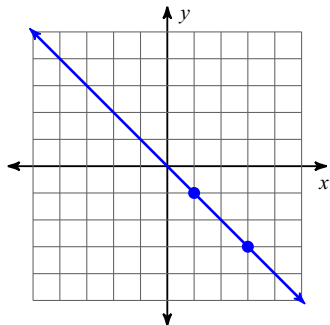
10) $\frac{7}{4} = \frac{a - 7}{a - 1}$

11) $\frac{n + 8}{7} = \frac{n + 8}{6}$

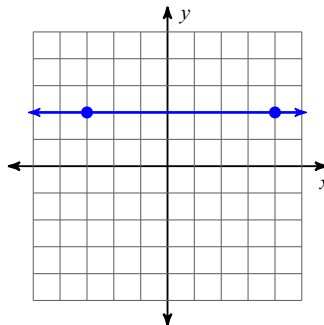
12) $\frac{2}{4} = \frac{x + 6}{x + 1}$

Find the slope of each line.

13)



14)



Find the slope of the line through each pair of points.

15) $(17, 4), (-1, -6)$

16) $(-2, 19), (13, -14)$

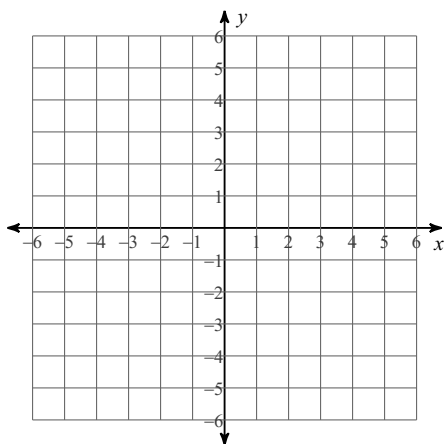
Find the value of x or y so that the line through the points has the given slope.

17) $(-6, 1)$ and $(-1, y)$; slope: $\frac{3}{5}$

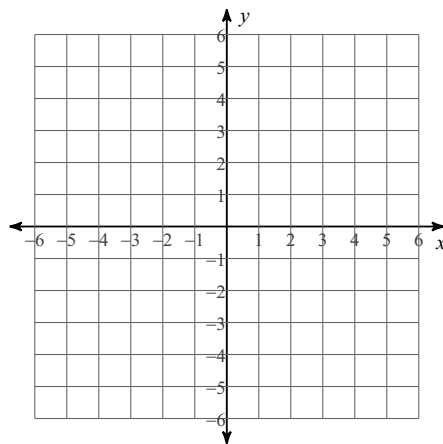
18) $(5, -6)$ and $(2, y)$; slope: $-\frac{5}{3}$

Find the slope and y -int for each equation and then graph each line.

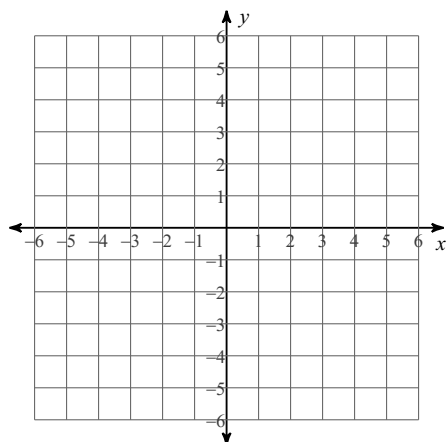
19) $y = 7x - 4$



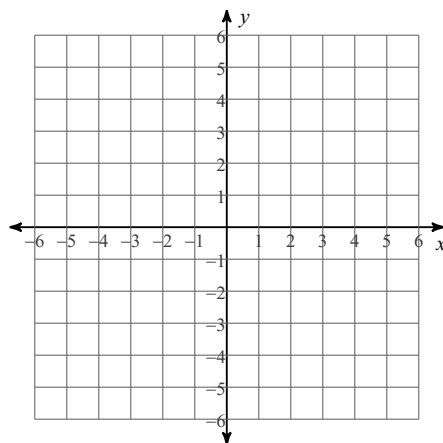
20) $y = \frac{1}{5}x + 5$



$$21) y = -\frac{1}{3}x - 1$$

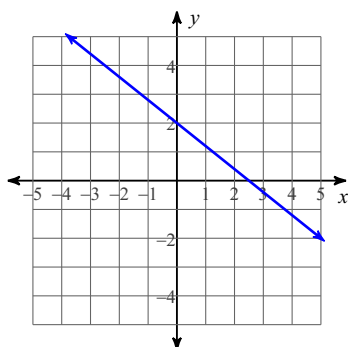


$$22) y = 4x - 2$$

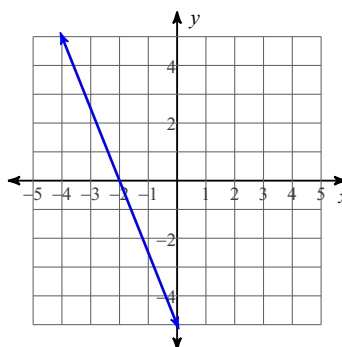


Write the slope-intercept form of the equation of each line.

23)



24)



$$25) 3x + y = 1$$

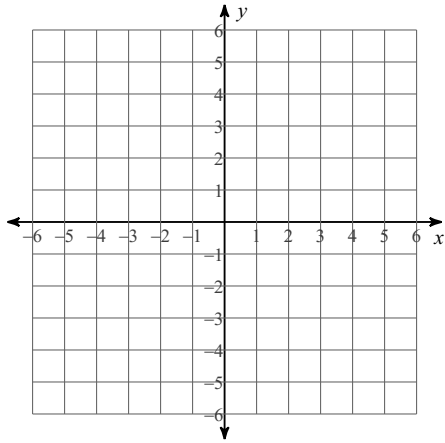
$$26) 4x - y = -2$$

$$27) y - 3 = -\frac{3}{4}(x + 4)$$

$$28) y - 5 = -\frac{1}{3}(x + 2)$$

Sketch the graph of each linear inequality.

29) $y > \frac{4}{5}x$



30) $y \leq -\frac{4}{3}x - 1$

