




Determine the amount of money shown.

**Answers**

1. \_\_\_\_\_




2. \_\_\_\_\_



3. \_\_\_\_\_



4. \_\_\_\_\_



5. \_\_\_\_\_



6. \_\_\_\_\_



7. \_\_\_\_\_



8. \_\_\_\_\_




9. \_\_\_\_\_



10. \_\_\_\_\_



Determine the amount of money shown.

**Answers**1. **\$0.98**2. **\$0.95**3. **\$0.91**4. **\$0.97**5. **\$0.71**6. **\$0.84**7. **\$0.95**8. **\$0.94**9. **\$0.76**10. **\$0.94**