

Name _____

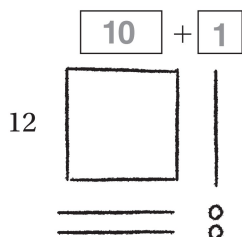
Represent Division with 2-Digit Divisors

Go Online

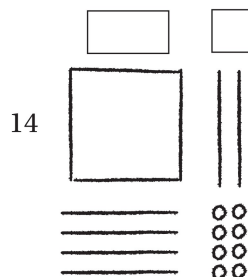
Interactive Examples

Use the quick picture to divide.

15. $132 \div 12 = \underline{\quad 11 \quad}$



16. $168 \div 14 = \underline{\quad \quad \quad}$



Divide. Draw a quick picture.


17. $192 \div 16 = \underline{\quad \quad \quad}$

18. $169 \div 13 = \underline{\quad \quad \quad}$

Problem Solving

19. There are 182 seats in a theater. The seats are evenly divided into 13 rows. How many seats are in each row?

20. There are 156 students at summer camp. The camp has 13 cabins. An equal number of students sleep in each cabin. How many students sleep in each cabin?

21.  Write a division problem that has a 3-digit dividend and a divisor between 10 and 20. Show how to solve it by drawing a quick picture.

Lesson Check

- 22.** There are 198 students in the soccer league. There are 11 players on each soccer team. How many soccer teams are there?
- 23.** Olier earned \$187 for 17 hours of work. How much did Olier earn per hour?

Spiral Review

- 24.** What is the number seven hundred thousand, twenty written in standard form?
- 25.** Round 79,389 to the nearest thousand.
- 26.** To transport 228 people to an island, the island ferry makes 6 different trips. On each trip, the ferry carries the same number of people. How many people does the ferry transport on each trip?
- 27.** Opaline sells 36 tickets to the school talent show. Each ticket costs \$14. How much money does Opaline collect for the tickets she sells?